

Section 1

Put the numbers in order, starting with the lowest.

15 18 12 16

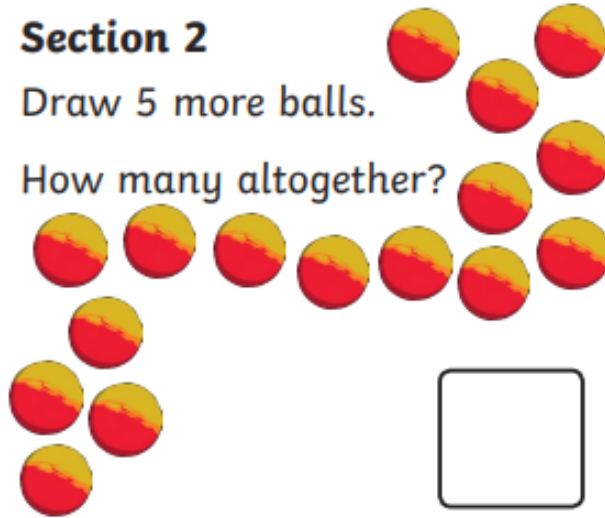
--	--	--	--



Section 2

Draw 5 more balls.

How many altogether?



Section 3

$$11 + 7 = \square$$

$$15 - 7 = \square$$

$$12 - 3 = \square$$

Section 4

Freija eats half the sweets. How many sweets are left?



Section 5

Group the cookies in twos.

How many groups are there?




Section 6

Tick the coins which add to 35p.



Section 7

Draw 12 spots onto the ladybird. An equal number on each side.



Section 8

Fill in the missing number.

24, 22, 20, , 16, 14



Section 1

14 is 5 more than which number? Tick the answer.

8

11

9

☐☐☐

Section 2

Draw 6 more snowflakes.

How many do you have altogether?



Section 3

$$13 - 8 = \boxed{}$$

$$14 + 9 = \boxed{}$$

$$15 - 6 = \boxed{}$$

Section 4

Millie spends £3.50.

How much does she have left?



Section 5

Group the butterflies in twos.
How many groups are there?
How many were left over?



Section 6

Circle the odd numbers.

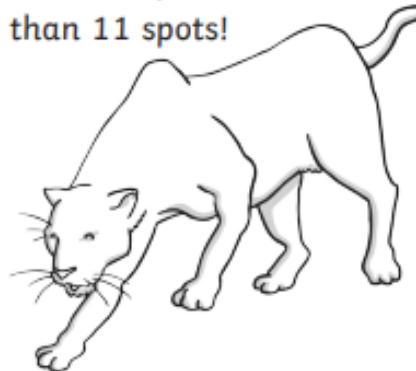
23 10

18

14 11

Section 7

Draw an even number of spots on the leopard. Draw no more than 11 spots!



Section 8

What is the missing number?

15, 20, 25, ?, 35, 40, 45.



Section 1

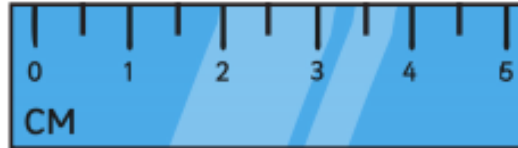
Put these numbers in order, starting with the highest.

15 22 17 32 37 29



Section 2

How long is the snake?



Section 3

$$18 - 9 = \boxed{}$$

$$18 + 7 = \boxed{}$$

$$18 - 11 = \boxed{}$$


Section 4

Belle has £9 and is given £8 more. How much does she have now?



Section 5

Share the biscuits evenly into 2 boxes. How many are in each box?



Section 6

If $13 = 10 + 3$, what is 31?

Section 7

How many chocolate bars can I buy for 45p?



Section 8

What number is next?

55, 50, 45, 40,



Section 1

What number is 8 less than 15?



Section 2

What time is on the clock?



Section 3

Add the coins.



Section 4

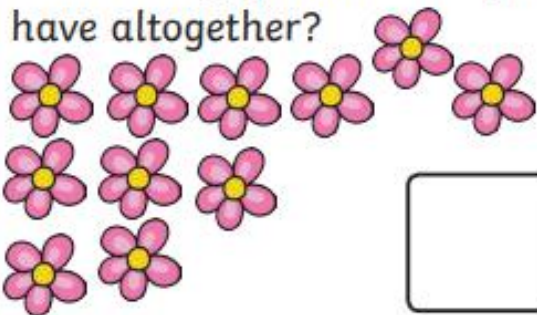
What is the underlined digit worth?

24

Section 5

Draw 4 more flowers.

How many flowers do you have altogether?




Section 6

If $17 = 10 + 7$, what is 27?

Section 7

Tick the smallest bear.




Section 8

$$12 + \square = 19$$



Section 1

How many apples are there altogether?



Section 2

Toby has 7 candles. He needs 13.

How many more does he need?



Section 3

Which shape has four sides, all the same length?

Section 5

What will the time be in 5 hours?



Section 6

What is double 9?

Section 7

Make the highest number you can with these digits.

2 3 6

Section 8

What time is on the clock?



Section 4

How tall is the giraffe?




Section 1

What is half of 20?

Section 2

How many fish are there altogether?



Section 3

What day is two days after Tuesday?

Section 4

What time will it be in 1 hour?



Section 5

How much of the square is shaded?



Section 6

$12 + 4 =$

$11 - 7 =$

$4 \times 10 =$

Section 7

Tick the coins that add up to 18p.



Section 8

Share the ducks equally between 2 ponds. How many ducks are in 1 pond?

