

# Year 1 Spring 1 Maths Activity Mat 1

## Section 1

Put the numbers in order, starting with the lowest.

**15 18 12 16**

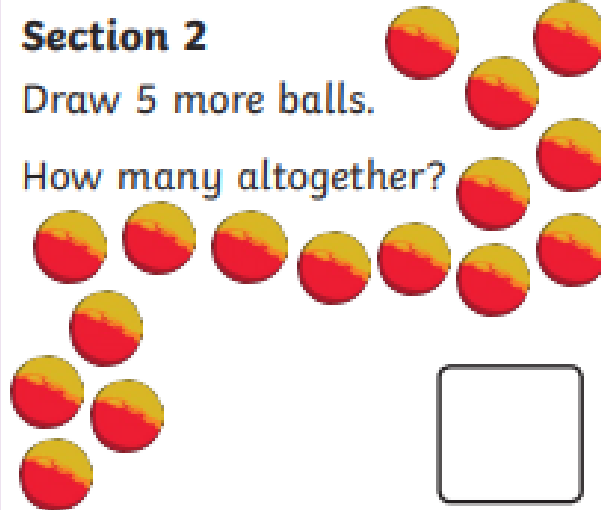
--	--	--	--



## Section 2

Draw 5 more balls.

How many altogether?



## Section 3


$$11 + 7 = \square$$

$$15 - 7 = \square$$

$$12 - 3 = \square$$

## Section 4

Freija eats half the sweets. How many sweets are left?



## Section 5


Group the cookies in twos.

How many groups are there?




## Section 6

Tick the coins which add to 35p.



## Section 7

Draw 12 spots onto the ladybird. An equal number on each side.



## Section 8

Fill in the missing number.

24, 22, 20,  $\square$ , 16, 14

