

Year 1 Spring 1 Maths Activity Mat 2

Section 1

14 is 5 more than which number? Tick the answer.

8

11


9

☐☐☐

Section 2

Draw 6 more snowflakes.

How many do you have altogether?



Section 3

$$13 - 8 = \square$$

$$14 + 9 = \square$$

$$15 - 6 = \square$$

Section 4


Millie spends £3.50.

How much does she have left?



Section 5

Group the butterflies in twos.
How many groups are there?
How many were left over?

☐☐

Section 6

Circle the odd numbers.

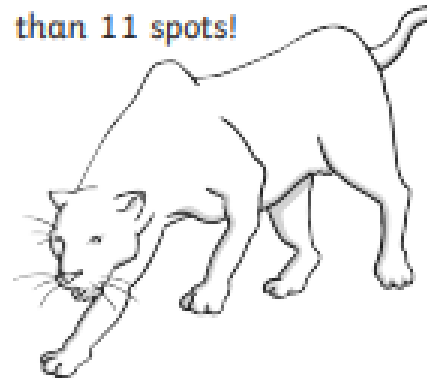
23 10

18

14 11

Section 7

Draw an even number of spots on the leopard. Draw no more than 11 spots!



Section 8

What is the missing number?

15, 20, 25, ?, 35, 40, 45.

☐